

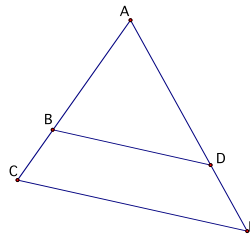
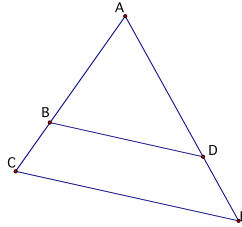
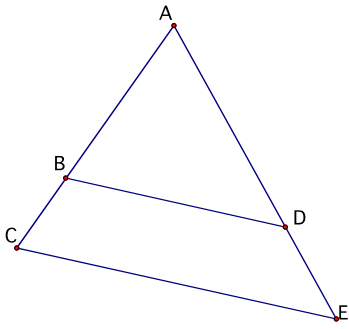
## SECTION 8.4: PROPORTIONALITY THEOREMS

Homework: \_\_\_\_\_

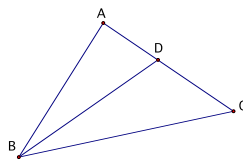
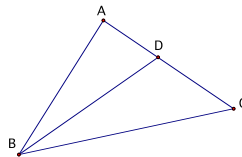
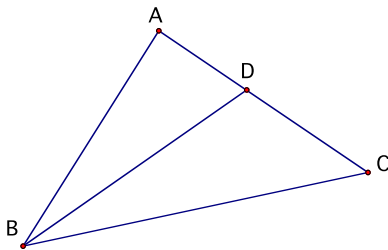
### Learning Targets:

- 8d. Determine ratios of sides when working with parallel lines and angle bisectors.

### Parallel Lines in Triangles Proportionality



### Angle Bisectors in Triangles



Parallel Lines Proportionality

