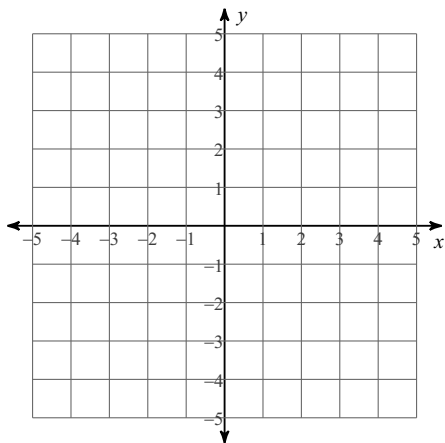
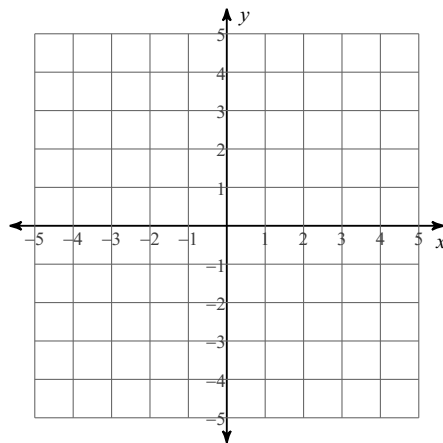


Solve each system by graphing.

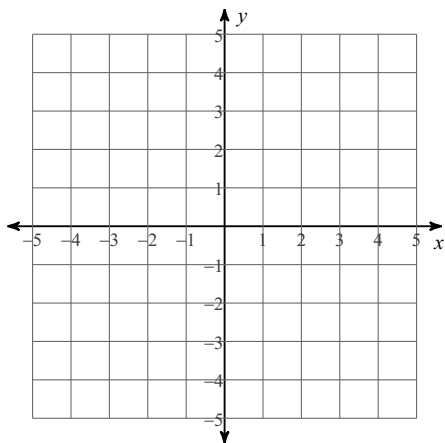
1) $3x + y = 4$
 $x - 2y = 6$



2) $x - 2y = 2$
 $7x - 4y = -16$



3) $8x + 3y = -12$
 $x + 3y = 9$



4) $x + y = -3$
 $8x + y = 4$

