

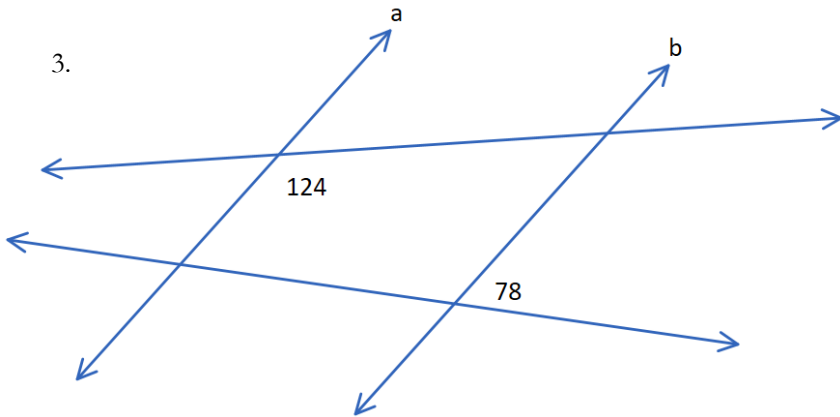
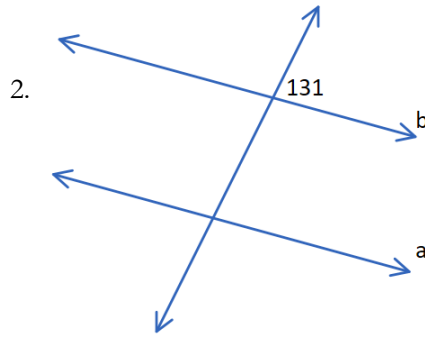
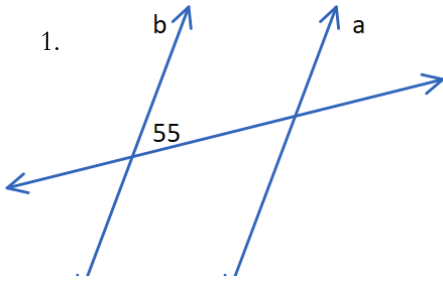
SECTION 3.2: PARALLEL LINES & TRANSVERSALS

Homework: _____

Learning Targets:

- 3b. Understanding of how to identify special angle pairs with parallel lines.
- 3c. Understanding of determining angle measures and solving equations when given special angle pairs.

Given that $a \parallel b$, fill in the missing angle measures.



Given that $a \parallel b$, solve for x .

