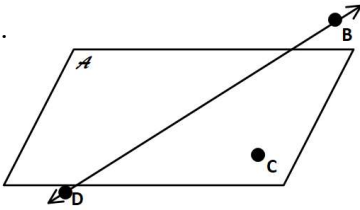


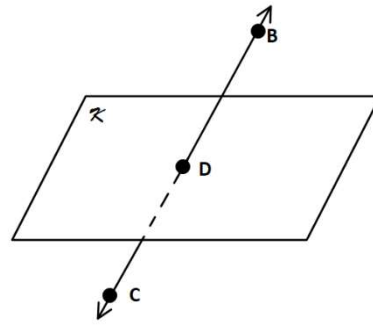
Geometry Drawing Geometric Figures Worksheet

Describe what each diagram represents.

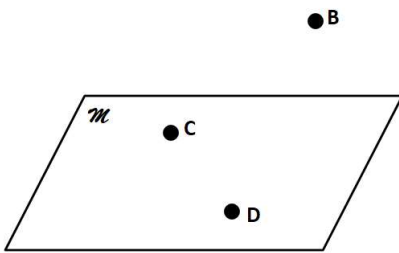
1.



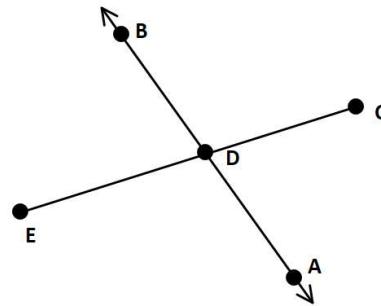
2.



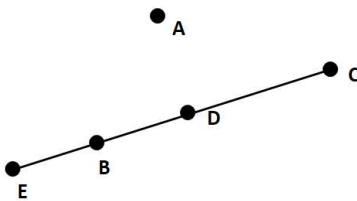
3.



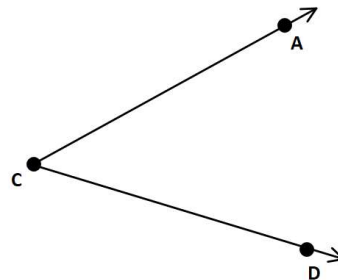
4.



5.



6.



Draw a figure for each statement.

7. \overrightarrow{AB} intersects plane L at E .

8. Points $A, B, C,$ and D are coplanar.

9. \overline{AB} intersects \overleftrightarrow{DE} at C .

10. Points $E, F,$ and G are noncollinear.

Use the diagram below to answer questions 11 – 20.

11. Name a line

12. Name a segment

13. Name 3 collinear points

14. Name 3 noncollinear points

15. Name 4 coplanar points

17. Give 2 different names for the plane.

19. Describe \overline{BG}

16. Name 4 noncoplanar points

18. Describe line n

20. Name 2 points that do not lie on plane A

