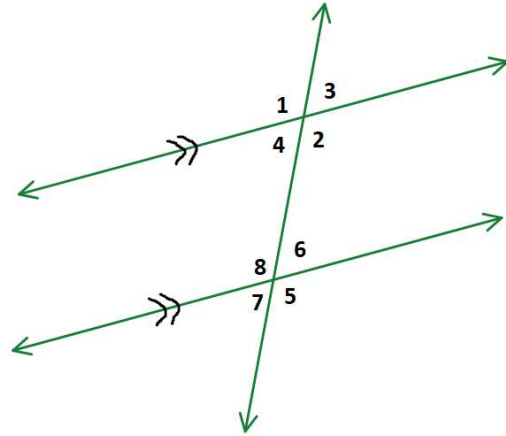


Geometry
Angle Pairs & Transversals Practices

Use the figure below to list the all the angle pairs.

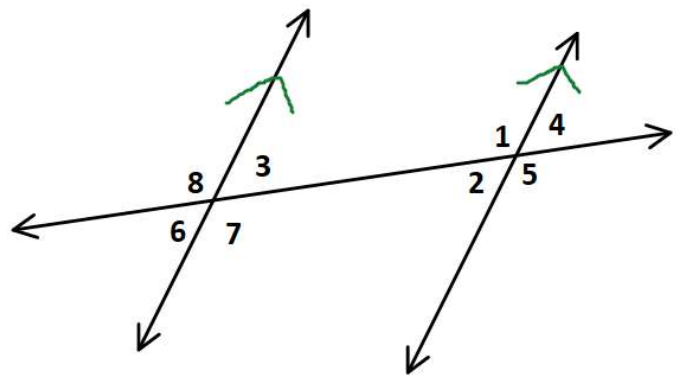
1. Vertical Angles
2. Alternate Interior Angles
3. Alternate Exterior Angles
4. Corresponding Angles



5. Consecutive Interior Angles

Use the figure below to list the all the angle pairs.

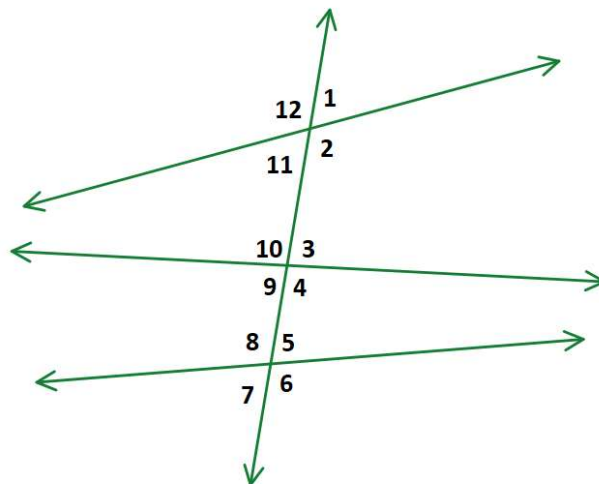
6. Vertical Angles
7. Alternate Interior Angles
8. Alternate Exterior Angles
9. Corresponding Angles



10. Consecutive Interior Angles

Identify the special angle pair name.

- Vertical Angles
- Linear Pair
- Alternate Interior Angles
- Alternate Exterior Angles
- Consecutive Interior Angles
- Corresponding Angles
- Not Related



11. $\angle 1$ and $\angle 3$

12. $\angle 11$ and $\angle 3$

13. $\angle 8$ and $\angle 11$

14. $\angle 5$ and $\angle 7$

15. $\angle 9$ and $\angle 10$

16. $\angle 6$ and $\angle 12$

17. $\angle 10$ and $\angle 11$

18. $\angle 8$ and $\angle 3$

19. $\angle 5$ and $\angle 11$

20. $\angle 6$ and $\angle 12$

21. $\angle 4$ and $\angle 12$

22. $\angle 2$ and $\angle 5$